

REZOLVĂ PROBLEMELE:



Am 4 baloane.  -  
 2 s-au spart.   
 Am rămas cu  baloane.

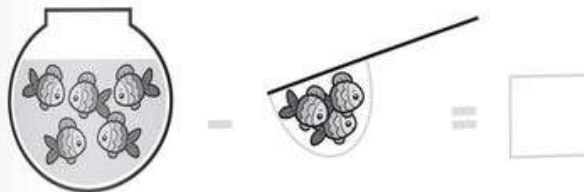
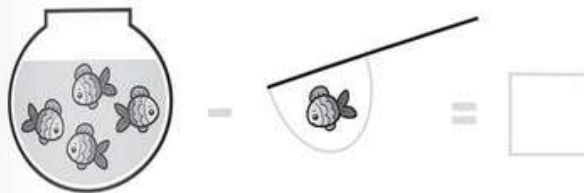
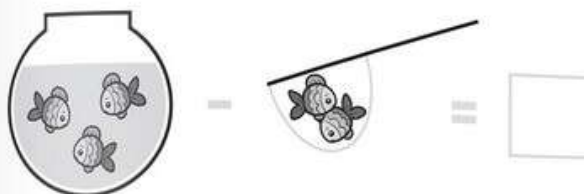


Am 2 baloane.  -  
 1 s-a spart.   
 Am rămas cu  baloane.



Am 1 balon.  -  
 1 s-a spart.   
 Am rămas cu  baloane.

SCRIE SCĂDERILE ȘI CALCULEAZĂ REZULTATELE.



PUNE SEMNUL POTRIVIT CA SĂ FIE CORECT REZULTATUL:



$1 \bigcirc 1 = 2$

$6 \bigcirc 2 = 4$

$2 \bigcirc 1 = 1$

$7 \bigcirc 2 = 9$

$3 \bigcirc 2 = 5$

$1 \bigcirc 5 = 6$

$2 \bigcirc 2 = 4$

$3 \bigcirc 4 = 7$

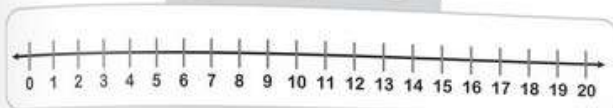
$4 \bigcirc 1 = 3$

$5 \bigcirc 3 = 2$

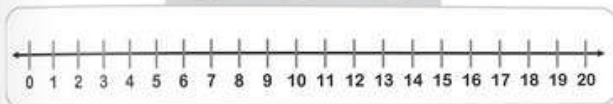
42

FOLOSEȘTE-TE DE AXA NUMERELOR CA SĂ REZOLVI SCĂDERILE.

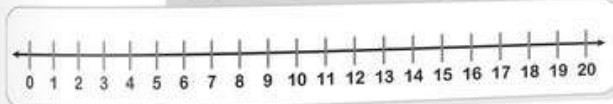
$18 - 5 = \bigcirc$




$20 - 13 = \bigcirc$



$16 - 11 = \bigcirc$


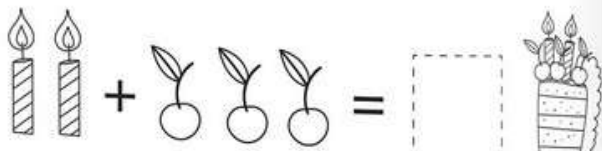
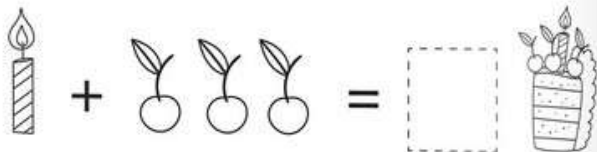
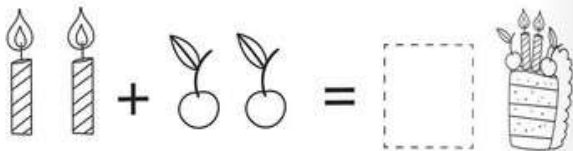
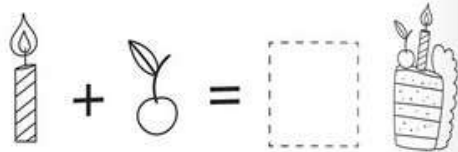


$13 - 4 = \bigcirc$




43

CĂTE LUMÂNĂRI ȘI CIREȘE SUNT PE FIECARE FELIE DE TORT?




14

SCRIE ÎN CĂSUȚE NUMERELE CORECTE. CĂTE BALOANE AU ÎMPREUNĂ COPIII ÎN FIECARE DINTRE ILUSTRĂȚII?



$$\square + \square = \square$$



$$\square + \square = \square$$

15