


Câte degete sunt?



Câte cuburi veri?

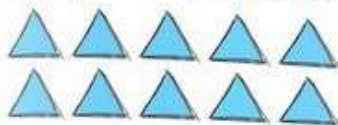



10

10

10

Scris lângă fiecare mulțime câte elemente are:







Colorează floarea care are 10 petale:



Porie cifrele!

1

1 1 1 1

2

2 2 2 2

3

3 3 3 3

4

4 4 4 4

5

5 5 5 5

6

6 6 6 6

7

7 7 7 7

8

8 8 8 8

9

9 9 9 9

Colorează barele:



1


2

3


Unește fiecare ilustrație de numărul potrivit:



3

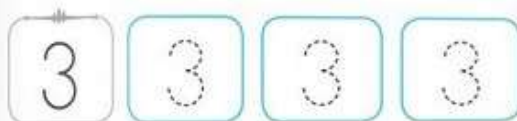
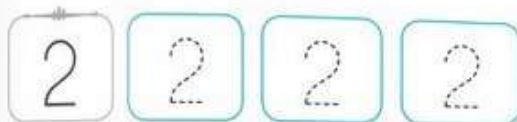
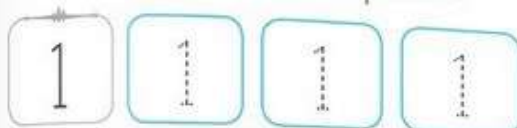


2

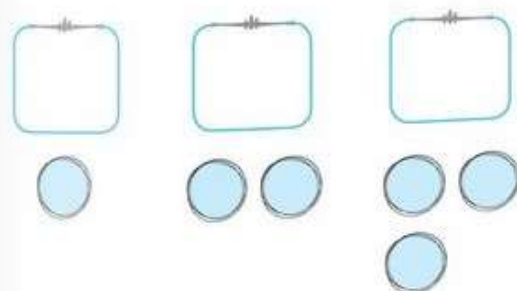


1

Scrie cifrele pe contururile punctate:



Scrie câte elemente sunt sub fiecare casetă:



Unește fiecare bară numerică de numărul potrivit.
 Colorează apoi barele în roșu și albastru.

--	--	--	--	--	--	--	--

8

--	--	--	--	--	--	--	--	--	--

7

--	--	--	--	--	--	--	--

9

Unește fiecare ilustrație de numărul potrivit.



8

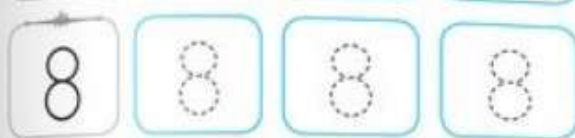
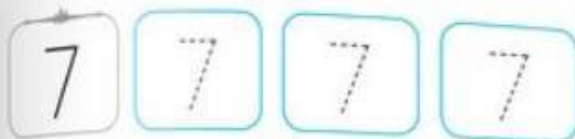


9



7

Peris cifrele pe contururile punctate:



Peris câte elemente sunt pe fiecare linie:

