


Gata de școală!



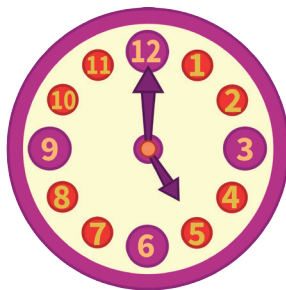
Matematică practică:  
măsurarea timpului și banii



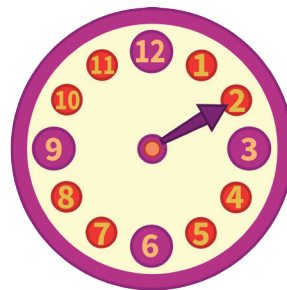
# La ce oră?

Măsurarea  
timpului

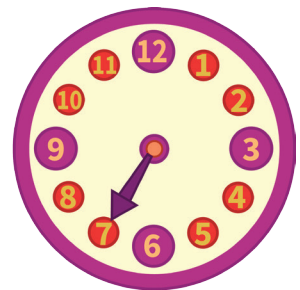
Desenează tu minutarul fiecărui ceas!



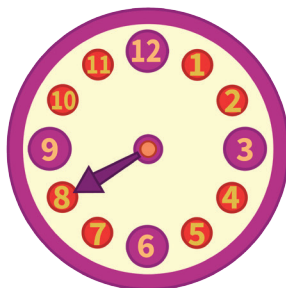
5:00



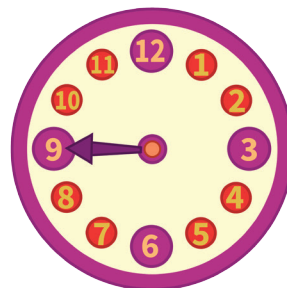
2:15



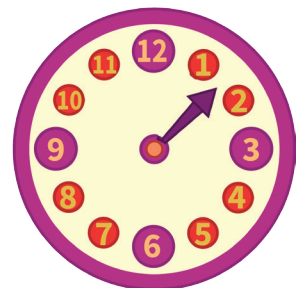
7:05



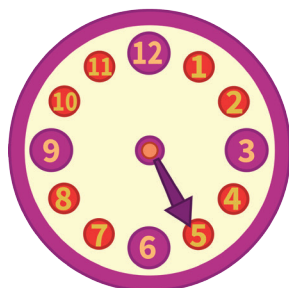
20:15



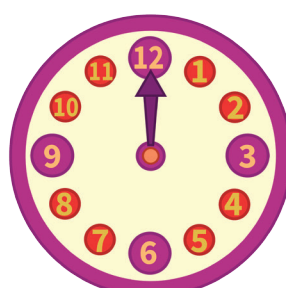
9:30



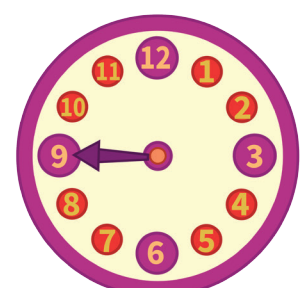
1:45



17:00



12:25



21:15

# Ore diferite

Măsurarea  
timpului

Cât e ceasul? Trage liniile corect!



17:05



20:15



19:55



19:10



22:05

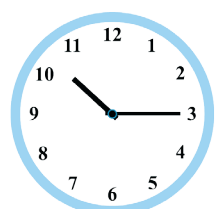




21:15

# Două feluri

Măsurarea  
timpului

Unește ceasurile care indică aceeași oră.



# O jucărie nouă

Banii

CÂȚI BANI ARE MARC?



EL MERGE ȘI CUMPĂRĂ O JUCĂRIE:



69 lei

CÂȚI LEI PRIMEȘTE REST?