

În junglă

Încercuiește-l pe cel mai înalt din fiecare grup.
Lipește abțibildurile cu ursul și bufnița.



raton



urs

bufniță



vulpe







iepure





Câte au mai rămas?

Numără obiectele care au fost tăiate și scrie câte au mai rămas. Lipește abțibildul cu înghețata.





Numără-i pe micuți



Calculează
și scrie numărul
micilor vietăți.
Lipește abțibildul
cu albina.

.....


.....



.....

.....

.....



Cel mai mic

Unește punctele pentru a încercui cel mai mic număr din fiecare rând.

A.

6

7

2

1

13

B.

3

2

8

9

5

C.

15

20

25

5

10

D.

21

11

9

8

6

E.

14

13

16

18

9

F.

5

7







9

6

4

Cel mai mare

Completează conturul triunghiului pe care e scris cel mai mare număr, pe fiecare rând.






Adunări

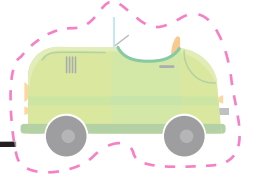


Adună numerele în altă ordine și vezi dacă obții aceeași sumă. Lipește abțibildul cu mașina.

$$2 + 3 + 4 = 9$$



$$3 + 1 + 2 = 6$$



$$4 + 5 + 1 = 10$$



$$5 + 2 + 2 = 9$$



$$2 + 5 + 1 = 8$$



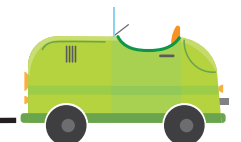
$$3 + 1 + 3 = 7$$



$$2 + 1 + 1 = 4$$



$$2 + 1 + 2 = 5$$

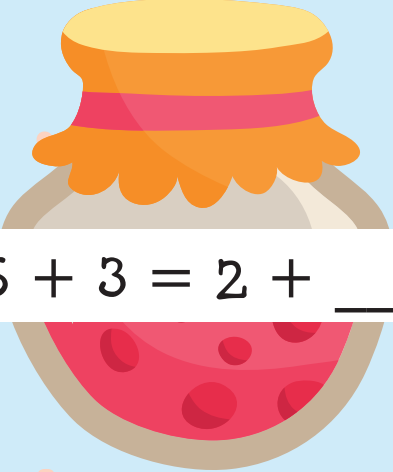


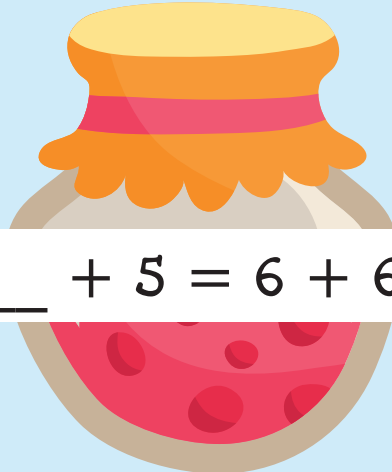
$$1 + 1 + 1 = 3$$

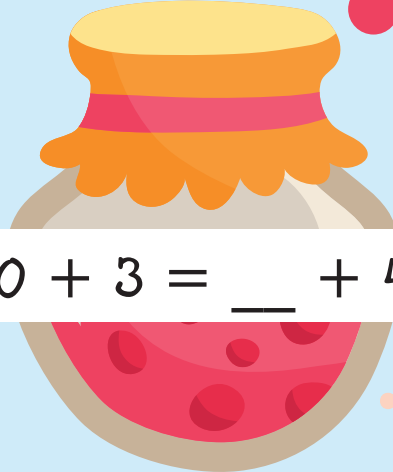


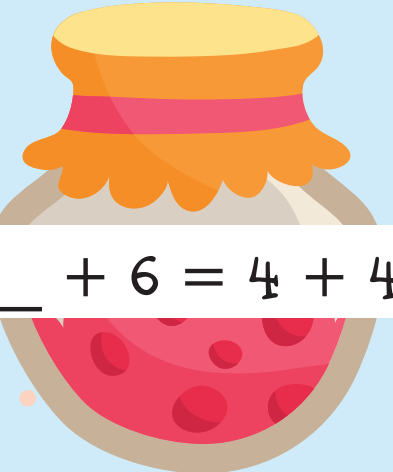
Borcane potrivite

Scrive numerele care lipsesc, astfel încât
egalitățile să fie corecte.

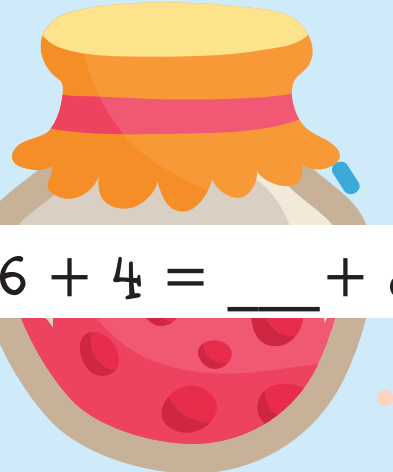

$$6 + 3 = 2 + \underline{\quad}$$

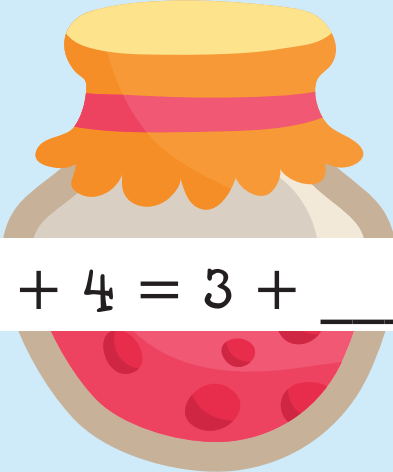

$$\underline{\quad} + 5 = 6 + 6$$


$$10 + 3 = \underline{\quad} + 4$$


$$\underline{\quad} + 6 = 4 + 4$$


$$11 + 8 = 8 + \underline{\quad}$$


$$16 + 4 = \underline{\quad} + 8$$


$$9 + 4 = 3 + \underline{\quad}$$


$$10 + 10 = 8 + \underline{\quad}$$