

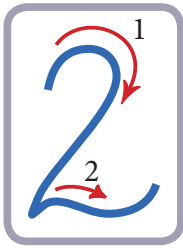



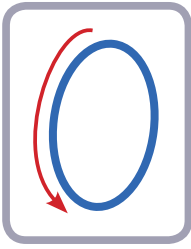
		1		1		1		1		1		1		1
1		1		1										
1														

		1		1		1		1		1		1		1		1
1		1		1												
1																
1																
1																
1																
1																
1																



	2	2	2	2	2	2	2
2	2	2					
2							


	2	2	2	2	2	2	2	2
2	2	2						
2								
2								
2								
1	2	1	2					
2	1	2	1					



		0	0	0	0	0	0
0	0						
0							

	0	0	0	0	0	0	0	0
0	0	0						
0								
0								
0								
0								
0	1	2	3	0				
3	2	1	0	3				

PROBLEME




$$\square + \square = \square$$

$$\square - \square = \square$$

$$\square + \square = \square$$

$$\square - \square = \square$$



10 → 20

• 11 11 11

12

13

14

15

16

17

18

19

20

• 12 15 17

19 15

•	19	13	18	17	11	
	17	16	12	19	12	
•	20	13	14	19	17	
	18	15	18	20	16	
•	14	20	11	13	19	15
↗	17	12	16	19	18	20
↘						
•		13			16	
		19			11	
•	10	12
	20	18